

English

1. Match the pictures with the words

(1x10=10)



Cat



Cap




Car



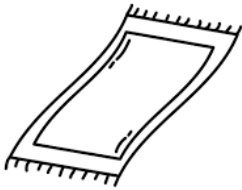
Pan



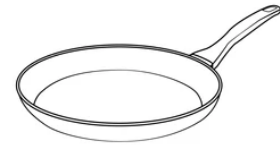
Pen




Mat




Hat



Bag



Van



Fan

2. Fill in the blanks with "A" or "An" .

1x5=5

a _____ can.

b _____ axe.

c. _____ Umbrella.

d. _____ tap.

e. _____ orange.

3. Tick (✓) the correct answer.

1x5=5

a. ((This/that) is a hut



b. (This/that) is a tree



c. (These/Those) are oranges



d. (This/that) is a pot



e. (This/these) are pens



4. Circle all the vowels.

5

b e g f

i t a s

u c v o

5. write one or many in the given blanks.

1x5=5


a.



b.




c.



d.

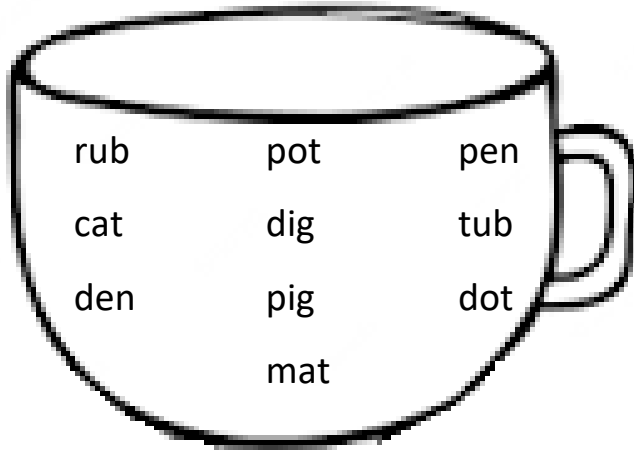


e.



6. Choose and write the correct rhyming words.

(5x2=10)



Cub _____

bat _____

cot _____

hen _____

big _____

7. complete the words.

(1x5=5)

a. P ___d



b. B ___ t


c. T ___ n

d. L ___ g

e. S ___ n



10




8. Write is or are in the blanks.

(1x5=5)

a. The apple _____ red




b. The kites _____ in the sky



c. The rose _____ pink



d. The birds _____ small



e. The mangoes _____ green



Mathematics

9. Write the missing numbers.

a. 23 _____ 25

b. 38 _____ 40

c. 79 _____ 81

$1 \times 5 = 5$

d. 48 _____ 50

e. 15 _____ 17

10. Write Number names.

$1 \times 5 = 5$

a. 25 =

b. 43 =

c. 19 =

d. 50 =

e. 85 =

11. Ring the smaller numbers.

$1 \times 5 = 5$

a. 57 75

b. 86 68

c. 89 91

d. 72 67

e. 22 14

12. Put the correct sign $>$, $<$ or $=$

$1 \times 5 = 5$

a. 7 _____ 27

d. 90 _____ 90

b. 38 _____ 20

e. 86 _____ 96

c. 62 _____ 69

13. Add the numbers.

$1 \times 5 = 5$

a. $6 + 3 =$

b. $4 + 5 =$


c. $5 + 5 =$

d. $9 + 0 =$

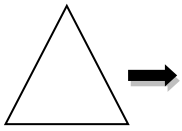
d. $5 + 3 =$

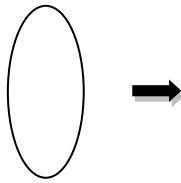
14. Write the name of following shapes.

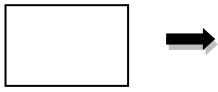
$1 \times 5 = 5$





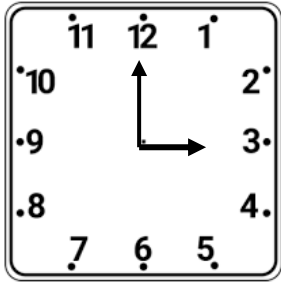







15. see the short hand and tell the time.


$1 \times 5 = 5$



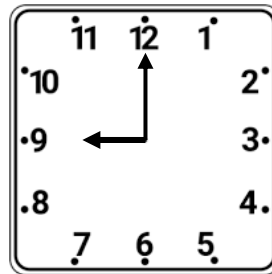
_____ O' Clock




_____ O' Clock



_____ O' Clock



_____ O' Clock



_____ O' Clock

16. What comes before.

$1 \times 5 = 5$

a. _____ 28

d. _____ 40

b. _____ 79

e. _____ 100

c. _____ 80

17. Subtract the numbers.

$1 \times 5 = 5$

a. $8 - 4 =$

b. $6 - 1 =$

c. $9 - 2 =$

d. $4 - 3 =$

e. $5 - 5 =$

18. Count and write the number.

1x5=5

